


# Master Odd and Even Numbers 21 to 100 A

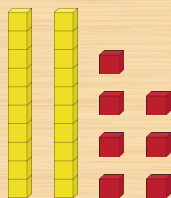
## Step 1

Take a number card.



## Step 2


Represent the number using Dienes.



## Step 3

Say the stem sentence...


**All 1s Dienes are / There are no 1s Dienes to be /**  
**One 1s Diene is \_\_\_\_\_. \_\_\_\_ is an odd / even number.**



One 1s Diene is unpaired. 27 is an odd number.

## Step 4

Create a pattern of odd and even numbers that includes the number you have represented.



Repeat the steps with a new number card.

