

Master Nearest to / Furthest from to 10,000,000

Fluency 1

Circle the numbers that complete each stem sentence.

4,800,000



4,800,000 is further from **0** / **10,000,000** than **0** / **10,000,000**

1,700,000



4,400,000



6,900,000

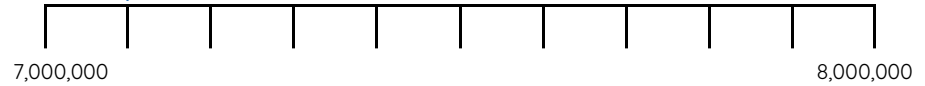


1,700,000 / **4,400,000** / **6,900,000** is nearest to 10,000,000

Fluency 2

Complete the stem sentences.

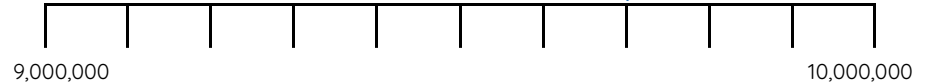
7,100,000



7,100,000 is _____ away from 7,000,000. 7,100,000 is _____ away from 8,000,000

7,100,000 is nearer to **7,000,000** / **8,000,000** than **7,000,000** / **8,000,000**

9,700,000



9,700,000 is _____ away from 9,000,000. 9,700,000 is _____ away from 10,000,000

9,700,000 is further from **9,000,000** / **10,000,000** than **9,000,000** / **10,000,000**

Reasoning, answers and teaching slides are available with a subscription.



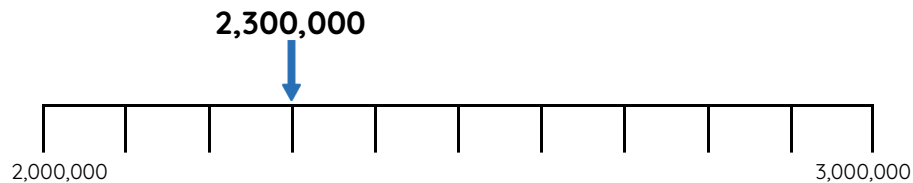
Fluency



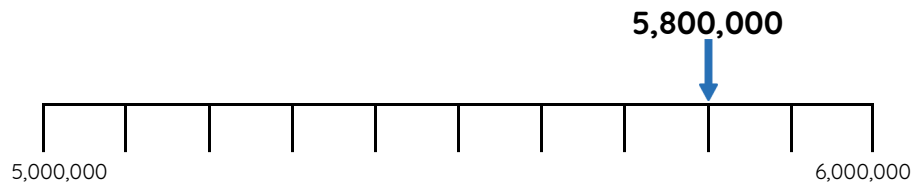
Master Nearest to / Furthest from to 10,000,000

Fluency 3

Circle the numbers that complete each stem sentence.



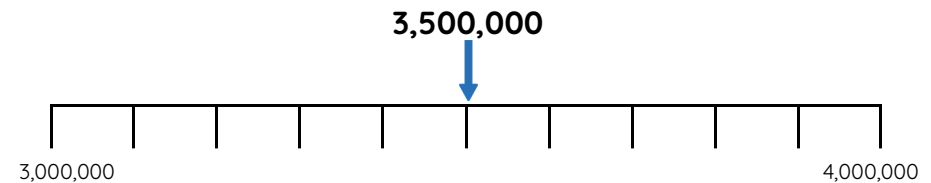
2,300,000 is nearer to **2,000,000 / 3,000,000** than
2,000,000 / 3,000,000



5,800,000 is further from **5,000,000 / 6,000,000** than
5,000,000 / 6,000,000

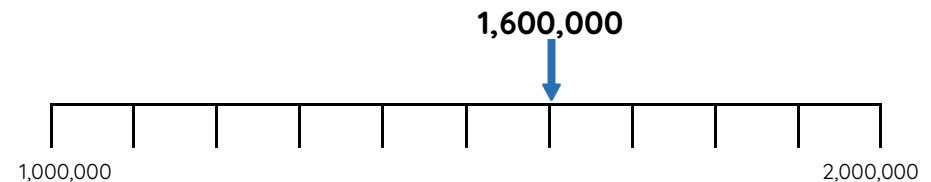
Fluency 4

Complete the stem sentences.



3,500,000 is _____ away from 3,400,000. 3,500,000 is _____
 away from 3,900,000

3,500,000 is nearer to **3,400,000 / 3,900,000** than **3,400,000 / 3,900,000**



1,600,000 is _____ away from 1,300,000. 1,600,000 is _____
 away from 1,800,000

1,600,000 is further from **1,800,000 / 1,300,000** than
1,800,000 / 1,300,000

Reasoning, answers and teaching slides are
 available with a subscription.



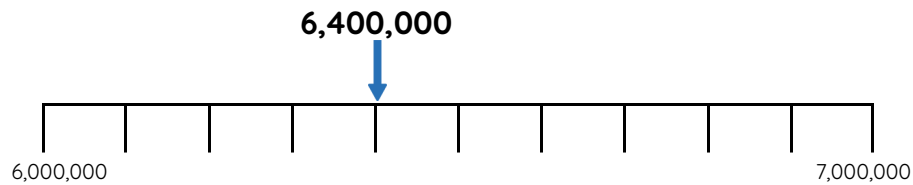
Fluency



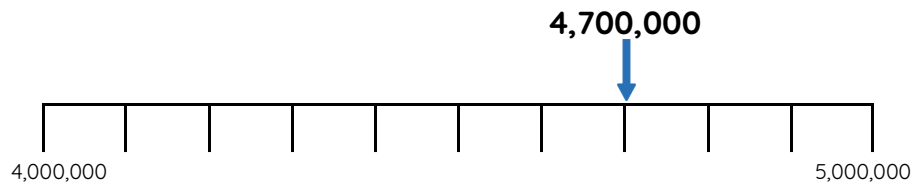
Master Nearest to / Furthest from to 10,000,000

Fluency 5

Circle the numbers that complete each stem sentence.



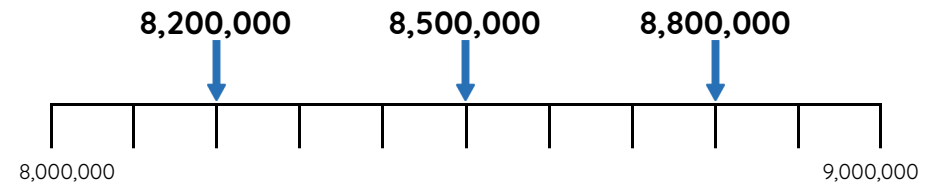
6,400,000 is nearer to **6,900,000** / **6,100,000** than **6,900,000** / **6,100,000**



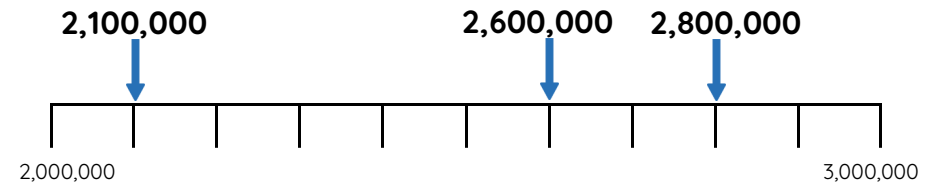
4,700,000 is further from **4,200,000** / **4,900,000** than **4,200,000** / **4,900,000**

Fluency 6

Complete the stem sentences.



_____ is nearest to 8,000,000



_____ is furthest from 2,500,000

Reasoning, answers and teaching slides are available with a subscription.



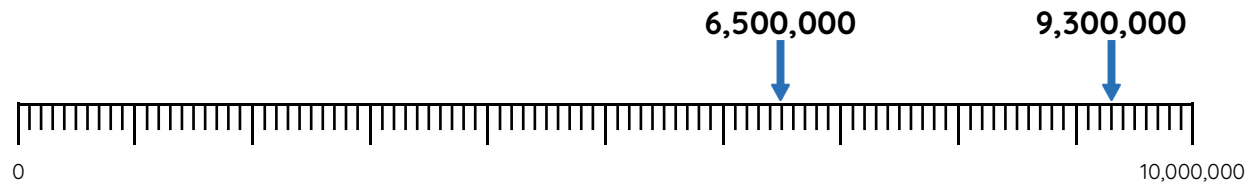
Fluency



Master Nearest to / Furthest from to 10,000,000

Fluency 7

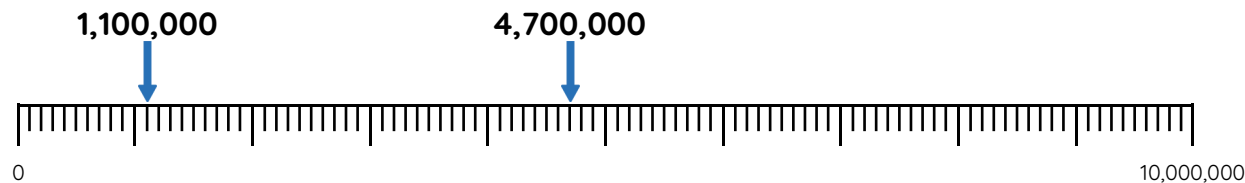
Complete the stem sentences.



6,500,000 is ____ away from 8,000,000

9,300,000 is ____ away from 8,000,000

6,500,000 / 9,300,000 is nearest to 8,000,000



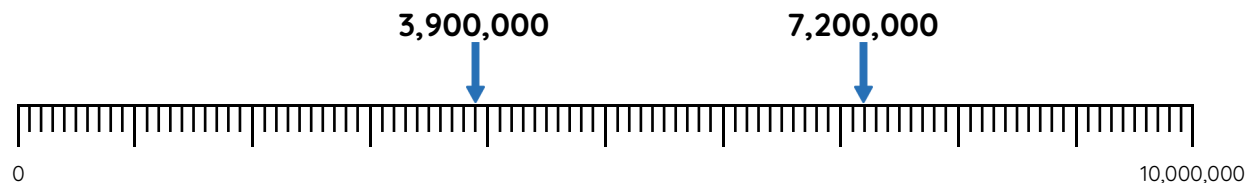
1,100,000 is ____ away from 2,800,000

4,700,000 is ____ away from 2,800,000

1,100,000 / 4,700,000 is furthest from 2,800,000

Fluency 8

Circle the number that completes each stem sentence.



3,900,000 / 7,200,000 is furthest from 5,000,000



600,000 / 2,400,000 is nearest to 1,300,000

Reasoning, answers and teaching slides are available with a subscription.



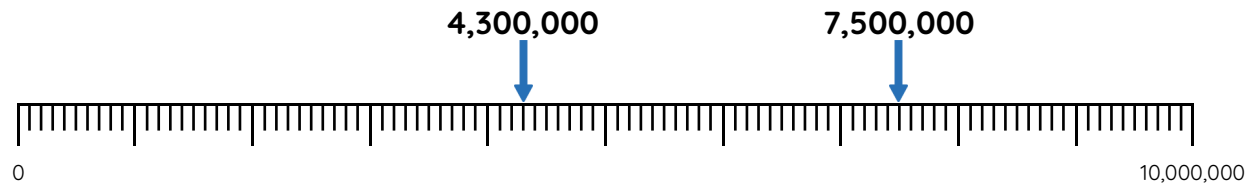
Fluency



Master Nearest to / Furthest from to 10,000,000

Fluency 9

Write the number that completes each stem sentence.



4,300,000 and _____ are an equal distance from 6,000,000

7,500,000 and _____ are an equal distance from 5,900,000

Fluency 10

Complete the stem sentences.

3,900,000 is _____ away from 4,000,000. 4,200,000 is _____ away from 4,000,000. **3,900,000 / 4,200,000** is nearest to 4,000,000

9,600,000 is _____ away from 9,900,000. 9,600,000 is _____ away from 10,000,000. **9,900,000 / 10,000,000** is furthest from 9,600,000

Fluency 11

Circle the number that makes each stem sentence correct.

5,400,000 / 5,600,000 / 6,300,000 is nearest to 6,000,000

1,900,000 / 2,000,000 / 2,400,000 is nearest to 2,300,000

9,200,000 / 8,300,000 / 8,600,000 is furthest from 8,800,000

Fluency 12

Write the number that makes each stem sentence correct.

1,800,000 and 2,200,000 are an equal distance from _____

7,200,000 and 7,800,000 are an equal distance from _____

4,600,000 and 5,200,000 are an equal distance from _____

3,800,000 and _____ are an equal distance from 5,000,000

8,500,000 and _____ are an equal distance from 7,000,000

5,400,000 and _____ are an equal distance from 4,900,000

Reasoning, answers and teaching slides are available with a subscription.



Fluency

