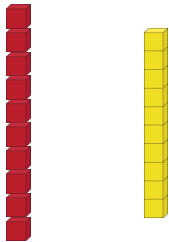


# Master 10s to 100

## Fluency 1

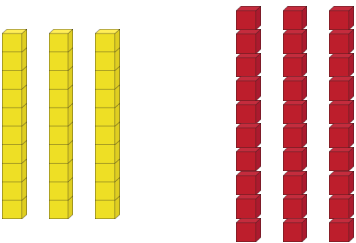
Complete the stem sentence.



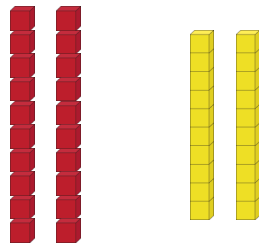
\_\_\_\_\_ ones are equivalent to 1 ten.

## Fluency 2

Complete the stem sentences.




\_\_\_\_\_ tens are equivalent to 30 ones.



\_\_\_\_\_ ones are equivalent to 2 tens.

## Fluency 3


Complete the stem sentence to match the representation.




\_\_\_\_\_ ones are equivalent to \_\_\_\_\_ tens.

## Fluency 4

Complete the stem sentences to match the representations.



\_\_\_\_\_ tens are equivalent to \_\_\_\_\_ ones.



\_\_\_\_\_ tens are equivalent to \_\_\_\_\_ ones.

