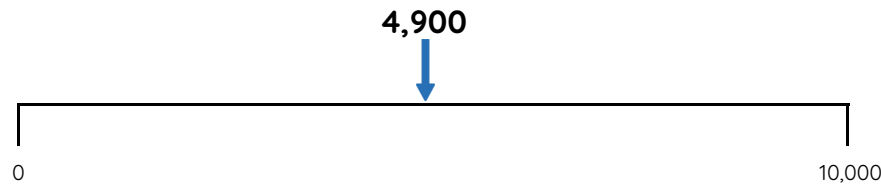


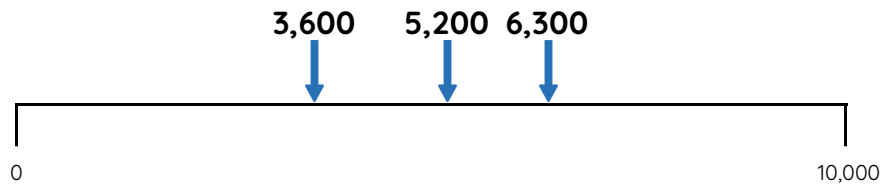
# Master Nearest to / Furthest from to 10,000

## Fluency 1

Circle the numbers that complete each stem sentence.



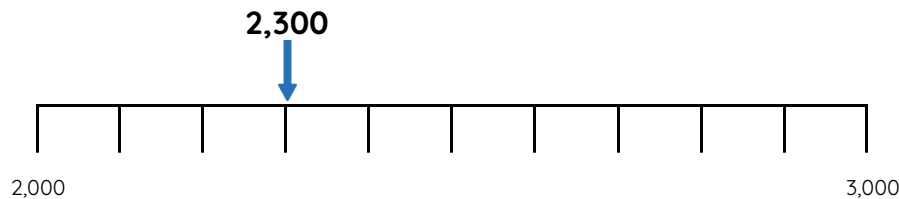
4,900 is nearer to **0 / 10,000** than **0 / 10,000**



**3,600 / 5,200 / 6,300** is furthest from 0

## Fluency 3

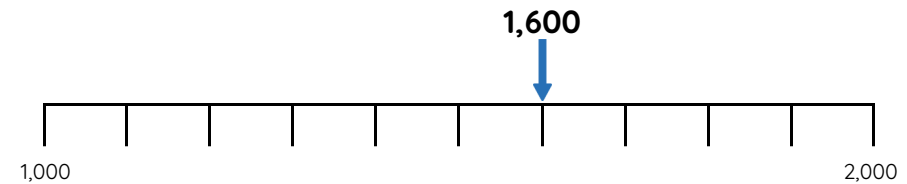
Circle the numbers that complete each stem sentence.



2,300 is nearer to **2,000 / 3,000** than **2,000 / 3,000**

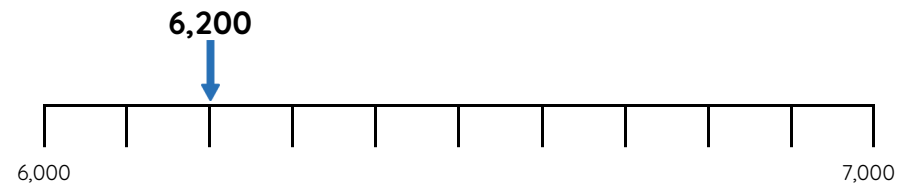
## Fluency 2

Complete the stem sentences.



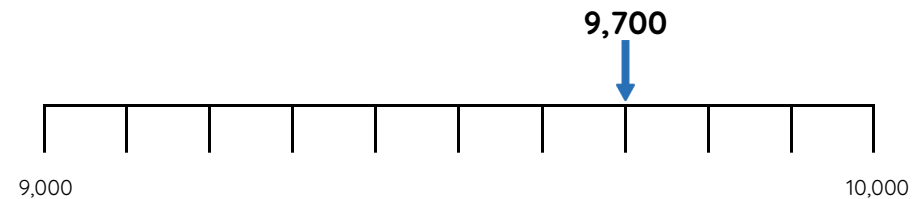
1,600 is \_\_\_\_ away from 1,000. 1,600 is \_\_\_\_ away from 2,000

1,600 is further from **1,000 / 2,000** than **1,000 / 2,000**



6,200 is \_\_\_\_ away from 6,000. 6,200 is \_\_\_\_ away from 7,000

6,200 is nearer to **6,000 / 7,000** than **6,000 / 7,000**



9,700 is further from **9,000 / 10,000** than **9,000 / 10,000**

Reasoning, answers and teaching slides are available with a subscription.



Fluency



# Master Nearest to / Furthest from to 10,000

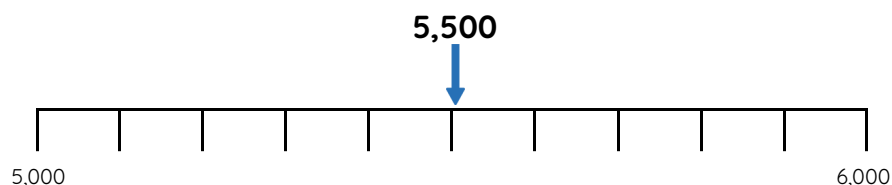
## Fluency 4

Complete the stem sentences.



3,900 is \_\_\_\_ away from 4,100. 3,900 is \_\_\_\_ away from 3,100

3,900 is further from **4,100 / 3,100** than **4,100 / 3,100**

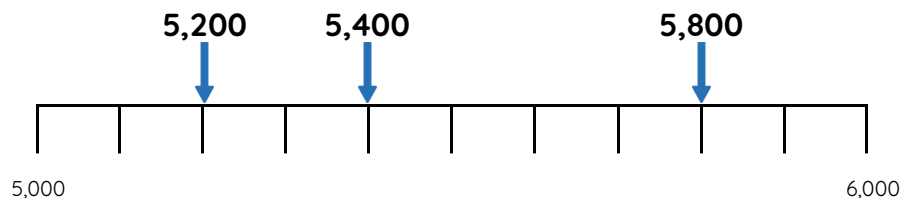


5,500 is \_\_\_\_ away from 5,300. 5,500 is \_\_\_\_ away from 5,800

5,500 is nearer to **5,300 / 5,800** than **5,300 / 5,800**

## Fluency 6

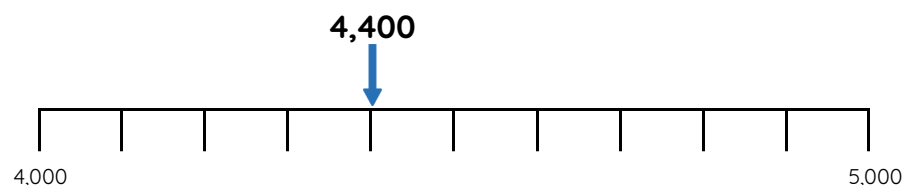
Write the number that completes each stem sentence.



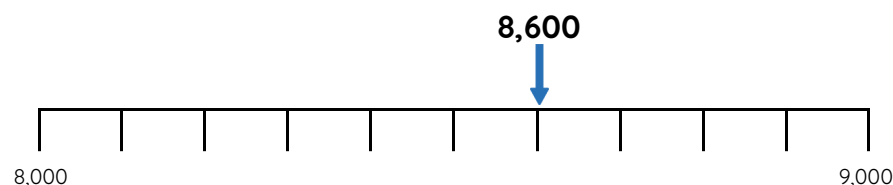
\_\_\_\_ is nearest to 6,000

## Fluency 5

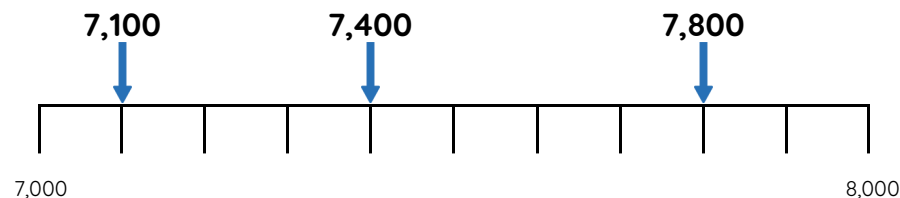
Circle the numbers that complete each stem sentence.



4,400 is nearer to **4,100 / 4,800** than **4,100 / 4,800**



8,600 is further from **8,800 / 8,200** than **8,800 / 8,200**



\_\_\_\_ is furthest from 7,500

Reasoning, answers and teaching slides are available with a subscription.



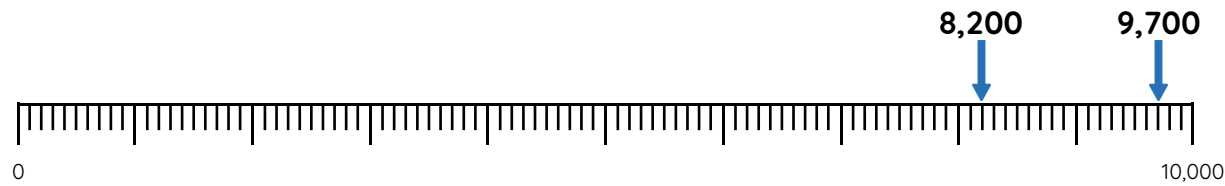
Fluency



# Master Nearest to / Furthest from to 10,000

## Fluency 7

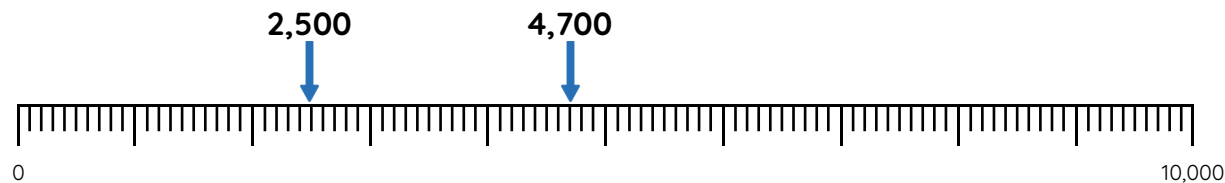
Complete the stem sentences.



8,200 is \_\_\_\_ away from 9,000

9,700 is \_\_\_\_ away from 9,000

**8,200 / 9,700** is nearest to 9,000



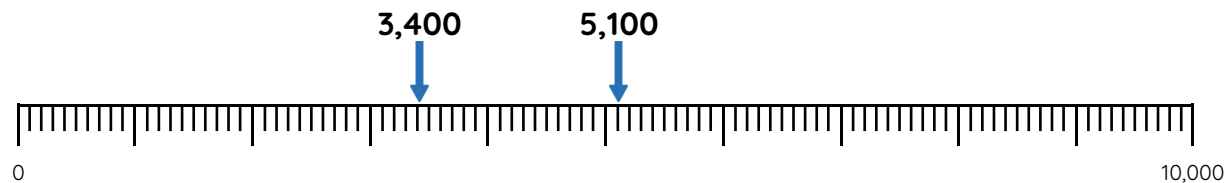
4,700 is \_\_\_\_ away from 3,700

2,500 is \_\_\_\_ away from 3,700

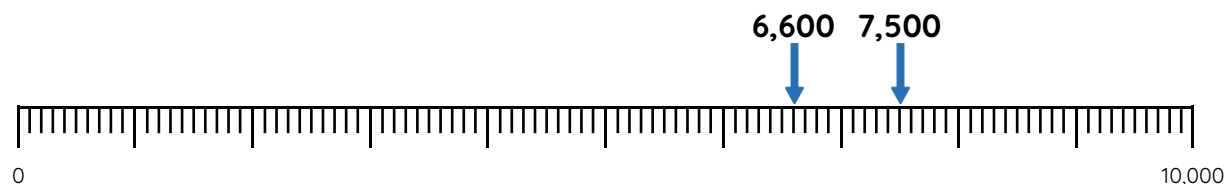
**4,700 / 2,500** is furthest from 3,700

## Fluency 8

Circle the number that completes each stem sentence.



**3,400 / 5,100** is furthest from 4,000



**6,600 / 7,500** is nearest to 7,100

Reasoning, answers and teaching slides are available with a subscription.



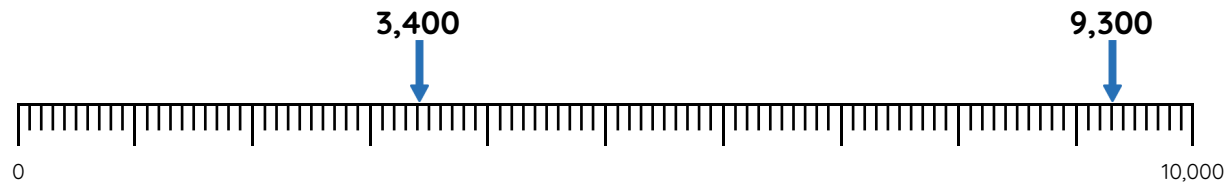
Fluency



# Master Nearest to / Furthest from to 10,000

## Fluency 9

Write the number that completes each stem sentence.



3,400 and \_\_\_\_ are an equal distance from 5,000

9,300 and \_\_\_\_ are an equal distance from 8,700

## Fluency 10

Complete the stem sentences.

6,800 is \_\_\_\_ away from 7,000. 7,300 is \_\_\_\_ away from 7,000.

**6,800 / 7,300** is nearest to 7,000

4,100 is \_\_\_\_ away from 3,700. 3,200 is \_\_\_\_ away from 3,700.

**4,100 / 3,200** is furthest from 3,700

## Fluency 11

Circle the number that makes each stem sentence correct.

**2,500 / 2,600 / 1,900** is furthest from 2,000

**5,100 / 4,800 / 5,500** is furthest from 4,900

**800 / 1,100 /**

## Fluency 12

Write the number that makes each stem sentence correct.

3,800 and 4,200 are an equal distance from \_\_\_\_

7,300 and 7,900 are an equal distance from \_\_\_\_

5,400 and 6,400 are an equal distance from \_\_\_\_

2,300 and \_\_\_\_ are an equal distance from 3,000

6,100 and \_\_\_\_ are an equal distance from 6,000

7,900 and \_\_\_\_ are an equal distance from 8,300

